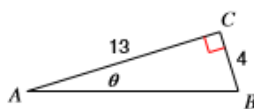


Find the measure of each angle indicated. Round to the nearest tenth.

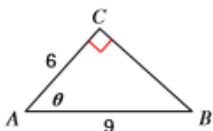
1)



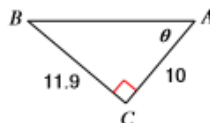
2)



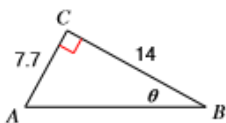
3)



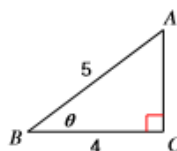
4)



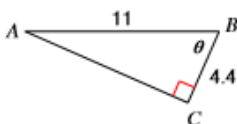
5)



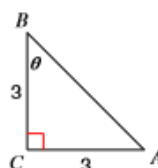
6)



7)

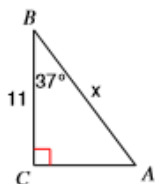


8)

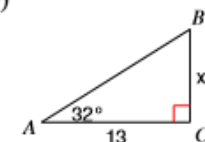


Find the measure of each side indicated. Round to the nearest tenth.

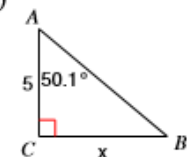
9)



10)



11)



12)

